

SSC MTS Paper (Held On 8 July 2022 Shift 3)


Multi Tasking Non Technical Staff Havaladar CBIC and CBN Examination
2021

Roll Number	
Candidate Name	
Venue Name	iON Digital Zone iDZ 2 Moula Ali
Exam Date	08/07/2022
Exam Time	5:00 PM - 6:30 PM
Subject	MTS Non technical and Havaladar Examination 2021

Section : General English

Q.1 Parts of the following sentence have been given as options. One of them contains an error. Select the part that contains the error from the given options.





The jute plant is usual harvested when it is at the flowering stage.

- Ans  1. when it is
-  2. is usual harvested
-  3. at the flowering stage
-  4. The jute plant

Question ID : 26433051211
Status : Answered
Chosen Option : 2

Q.2 Select the most appropriate meaning of the underlined idiom.





My cousin's office is at a stone's throw from my house.

- Ans  1. Near the forest
-  2. In a dangerous situation
-  3. A short distance
-  4. A long route

Question ID : 26433050890
Status : Answered
Chosen Option : 3

Q.3 Select the option that can be used as a one-word substitute for the given group of words.

That which can be easily broken

- Ans  1. Fragile
-  2. Durable
-  3. Portable
-  4. Stern

Question ID : 26433050995
Status : Answered
Chosen Option : 1

Q.4 The following sentence has been divided into parts. One of them may contain an error.
Select the part that contains the error from the given options. If you don't find any error, mark 'No error' as your answer.

She say that she feels very / lonely and depressed / living in a big house.

Ans ☒ 1. She say that she feels very

☐ 2. living in a big house

☐ 3. No error

☐ 4. lonely and depressed

Question ID : 26433051288

Status : **Answered**

Chosen Option : 1

Q.5 The following sentence has been divided into parts. One of them may contain an error.
Select the part that contains the error from the given options. If you don't find any error, mark 'No error' as your answer.

I am currently worked / with a newly / set up marketing company.

Ans ☐ 1. No error

☐ 2. set up marketing company

☒ 3. I am currently worked

☐ 4. with a newly

Question ID : 26433050576

Status : **Answered**

Chosen Option : 3

Q.6 Select the most appropriate synonym of the given word.

Concede

Ans ☐ 1. Reject

☒ 2. Permit

☐ 3. Deny

☐ 4. Fascinate

Question ID : 26433051590

Status : **Answered**

Chosen Option : 2

Q.7 Select the most appropriate synonym of the underlined word in the given sentence.

We need to protest against this policy.

Ans ☒ 1. resist

☐ 2. assent

☐ 3. validate

☐ 4. perk

Question ID : 26433050541

Status : **Answered**

Chosen Option : 1

Q.8 Select the option that can be used as a one-word substitute for the given group of words.





Weakness and poor health

- Ans**  1. Geniality
 2. hospitality
 3. Frailty
 4. Obscurity

Question ID : 26433051631
Status : Answered
Chosen Option : 3

Q.9 Select the option that can be used as a one-word substitute for the given group of words.

To own up to something as true

- Ans**  1. Confess
 2. Suppress
 3. Redress
 4. Assess

Question ID : 26433051483
Status : Answered
Chosen Option : 1

Q.10 Select the correctly spelt word.

- Ans**  1. Credintial
 2. Habichual
 3. Lopsided
 4. Adventurios

Question ID : 26433051232
Status : Marked For Review
Chosen Option : 3

Q.11 Select the most appropriate word for the given group of words.

A person incapable of making mistakes

- Ans**  1. Infallible
 2. Pure
 3. Optimist
 4. Naive

Question ID : 26433050493
Status : Answered
Chosen Option : 1

Q.12 Select the most appropriate option to fill in the blank.

Danny lay on his back staring at the _____ of his room.

- Ans ☒ 1. sealing
☒ 2. ceiling
☒ 3. seeding
☒ 4. syringe

Question ID : 26433050704
Status : Answered
Chosen Option : 2

Q.13 Select the option that can be used as a one-word substitute for the given group of words.

A sound that is pleasing to hear

- Ans ☒ 1. Inspired
☒ 2. Melodious
☒ 3. Harsh
☒ 4. Audible

Question ID : 26433051328
Status : Answered
Chosen Option : 2

Q.14 Select the most appropriate ANTONYM of the given word.

Cowardly

- Ans ☒ 1. Integral
☒ 2. Fleeting
☒ 3. Spineless
☒ 4. Valiant

Question ID : 26433051410
Status : Answered
Chosen Option : 1

Q.15 Select the most appropriate ANTONYM of the underlined word in the given sentence.

I believe in having a clear and lucid conversation.

- Ans ☒ 1. Ambiguous
☒ 2. Tangible
☒ 3. Coherent
☒ 4. Blazing

Question ID : 26433050860
Status : Answered
Chosen Option : 1

Q.16 Select the most appropriate synonym of the given word.

Deficient

- Ans
- ☒ 1. Sleek
 - ☒ 2. Whole
 - ☒ 3. Incomplete
 - ☒ 4. Integral

Question ID : 26433050592
Status : Answered
Chosen Option : 3

Q.17 Select the INCORRECTLY spelt word.

- Ans
- ☒ 1. Admonish
 - ☒ 2. Agravate
 - ☒ 3. Assertion
 - ☒ 4. Accumulate

Question ID : 26433051413
Status : Answered
Chosen Option : 2

Q.18 Select the most appropriate option to substitute the underlined segment in the given sentence. If there is no need to substitute it, select 'No substitution required.'

The missing child was discovered in lower Maryland a few days later.

- Ans
- ☒ 1. little days later
 - ☒ 2. a lot of days later
 - ☒ 3. No substitution required
 - ☒ 4. few day later

Question ID : 26433051213
Status : Answered
Chosen Option : 3

Q.19 Select the most appropriate meaning of the given idiom.

Set the wheels in motion

- Ans
- ☒ 1. To initiate a chain of events
 - ☒ 2. To drive very fast
 - ☒ 3. To end a journey
 - ☒ 4. To end a discussion

Question ID : 26433051203
Status : Answered
Chosen Option : 1

Q.20 Select the most appropriate option to fill in the blank.

I signed this science project _____ London.

- Ans ☒ 1. beneath
☒ 2. in
☒ 3. by
☒ 4. into

Question ID : 26433050527
Status : Answered
Chosen Option : 2

Comprehension:

In the following passage, some words have been deleted. Read the passage carefully and select the most appropriate option to fill in each blank.

With over 49,000 plant species (1) _____ as of 2018, India holds (2) _____ 11.5% of all the flora in the world. Now, a new fossil record has (3) _____ that India is the birthplace of Asian bamboo, and they (4) _____ formed about 25 million years ago in the north-eastern (5) _____ of the country.

SubQuestion No : 21

Q.21 Select the most appropriate option to fill in blank number 1.

- Ans ☒ 1. reported
☒ 2. signed
☒ 3. assigned
☒ 4. deserved

Question ID : 26433050530
Status : Answered
Chosen Option : 1

Comprehension:

In the following passage, some words have been deleted. Read the passage carefully and select the most appropriate option to fill in each blank.

With over 49,000 plant species (1) _____ as of 2018, India holds (2) _____ 11.5% of all the flora in the world. Now, a new fossil record has (3) _____ that India is the birthplace of Asian bamboo, and they (4) _____ formed about 25 million years ago in the north-eastern (5) _____ of the country.

SubQuestion No : 22

Q.22 Select the most appropriate option to fill in blank number 2.

- Ans ☒ 1. on
☒ 2. off
☒ 3. upon
☒ 4. about

Question ID : 26433050531
Status : Answered
Chosen Option : 4





Comprehension:

In the following passage, some words have been deleted. Read the passage carefully and select the most appropriate option to fill in each blank.

With over 49,000 plant species (1) _____ as of 2018, India holds (2) _____ 11.5% of all the flora in the world. Now, a new fossil record has (3) _____ that India is the birthplace of Asian bamboo, and they (4) _____ formed about 25 million years ago in the north-eastern (5) _____ of the country.

SubQuestion No : 23

Q.23 Select the most appropriate option to fill in blank number 3.

- Ans  1. limited
  2. known
  3. shown
  4. arranged

Question ID : 26433050532
Status : Answered
Chosen Option : 2


Comprehension:

In the following passage, some words have been deleted. Read the passage carefully and select the most appropriate option to fill in each blank.

With over 49,000 plant species (1) _____ as of 2018, India holds (2) _____ 11.5% of all the flora in the world. Now, a new fossil record has (3) _____ that India is the birthplace of Asian bamboo, and they (4) _____ formed about 25 million years ago in the north-eastern (5) _____ of the country.

SubQuestion No : 24

Q.24 Select the most appropriate option to fill in blank number 4.

- Ans  1. was
  2. has
  3. were
  4. are

Question ID : 26433050533
Status : Answered
Chosen Option : 3

Comprehension:

In the following passage, some words have been deleted. Read the passage carefully and select the most appropriate option to fill in each blank.

With over 49,000 plant species (1) _____ as of 2018, India holds (2) _____ 11.5% of all the flora in the world. Now, a new fossil record has (3) _____ that India is the birthplace of Asian bamboo, and they (4) _____ formed about 25 million years ago in the north-eastern (5) _____ of the country.

SubQuestion No : 25

Q.25 Select the most appropriate option to fill in blank number 5.

- Ans ☒ 1. part
☐ 2. beside
☐ 3. type
☐ 4. bit

Question ID : 26433050534
Status : Answered
Chosen Option : 1

Section : General Intelligence and Reasoning

Q.1 Select the figure from the given options that can replace the question mark (?) and complete the pattern.



- Ans ☒ 1.
- ☐ 2.
- ☐ 3.
- ☐ 4.

Question ID : 26433048763
Status : Answered
Chosen Option : 1

Q.2 Select the option that is related to the fourth number in the same way as the first number is related to the second number and the fifth number is related to the sixth number.

32 : 99 :: ? : 45 :: 16 : 51

- Ans
- ☐ 1. 18
 - ☐ 2. 12
 - ☐ 3. 10
 - ☒ 4. 14

Question ID : 26433048766
Status : Answered
Chosen Option : 4

Q.3 Select the option that is related to the third letter-cluster in the same way as the second letter-cluster is related to the first letter-cluster.

PM : RJ :: TF : ?

- Ans
- ☐ 1. VD
 - ☒ 2. VC
 - ☐ 3. UD
 - ☐ 4. UC

Question ID : 26433048549
Status : Answered
Chosen Option : 2

Q.4 Select the option that is related to the third letter-cluster in the same way as the second letter-cluster is related to the first letter-cluster.

KIN : MGS :: RFB : ?

- Ans
- ☐ 1. THE
 - ☐ 2. TCG
 - ☐ 3. TDH
 - ☒ 4. TDG

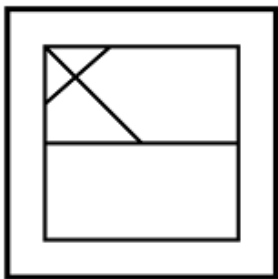
Question ID : 26433048776
Status : Answered
Chosen Option : 4

Q.5 Select the option in which the given figure is embedded (rotation is NOT allowed).

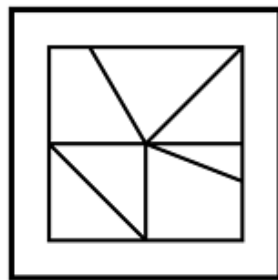


Ans

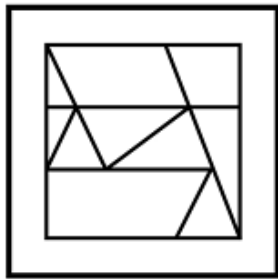
✗ 1.



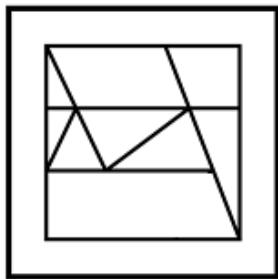
✓ 2.



✗ 3.




✗ 4.



Question ID : 26433047939
Status : Answered
Chosen Option : 2

Q.6 Which two digits need to be interchanged to make the following equation correct?

$$16 \div 7 \times 2 + 4 - 3 = 12$$

- Ans  1. 2 and 4
 2. 7 and 4
 3. 16 and 2
 4. 7 and 3

Question ID : 26433047986
Status : Answered
Chosen Option : 2

Q.7 Select the number from among the given options that can replace the question mark (?) in the following series.

64, 68, 77, 93, 118, ?

- Ans  1. 168
 2. 154
 3. 157
 4. 134

Question ID : 26433048593
Status : Answered
Chosen Option : 2

Q.8 In a certain code language, 'HERO' is written as 'IGSQ' and 'LOVE' is written as 'MQWG'. How will 'ROAD' be written in that language?

- Ans  1. SQBF
 2. SQBE
 3. SQCF
 4. SPBF

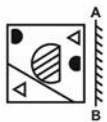
Question ID : 26433047922
Status : Answered
Chosen Option : 1

Q.9 In a certain code language, 'AB CD' is coded as '10', and 'EG FA' is coded as '19'. How will 'JR LF' be coded in that language?

- Ans  1. 48
 2. 50
 3. 46
 4. 44

Question ID : 26433048872
Status : Answered
Chosen Option : 3

Q.10 Select the correct mirror image of the given figure when the mirror is placed at AB as shown.



Ans

✗ 1.



✓ 2.



✗ 3.



✗ 4.

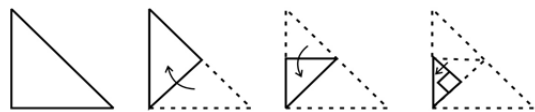


Question ID : 26433048586

Status : Answered

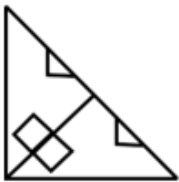
Chosen Option : 2

Q.11 The sequence of folding a piece of paper and the manner in which the folded paper has been cut is shown in the following figures. How would this paper look when unfolded?

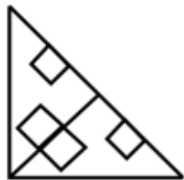


Ans

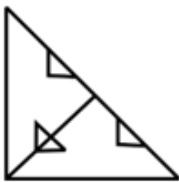
✗ 1.



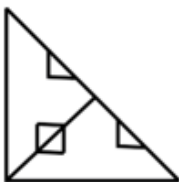
✓ 2.



✗ 3.



✗ 4.



Question ID : 26433048116
Status : Answered
Chosen Option : 2

Q.12 Select the figure from among the given options that can replace the question mark (?) in the following series.

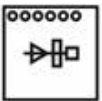


Ans

✓ 1.



✗ 2.



✗ 3.



✗ 4.



Question ID : 26433048609

Status : Answered

Chosen Option : 1

Q.13 Eight girls X, Y, Z, U, V, W, S and T are sitting around a circular table, facing towards the centre (not necessarily in the same order). X is second to the left of U. U is third to the left of V. Z is third to the right of S. S is not the immediate neighbour of V. T is third to the right of Y. Y is second to the right of S. Three out of the following four options are similar by a certain logic and form a group. Which of the following does NOT belong to that group?

Ans ✗ 1. YS

✗ 2. WV

✓ 3. YZ

✗ 4. UX

Question ID : 26433048681

Status : Answered

Chosen Option : 3

Q.14 In a certain code language, 'OVERT' is written as 'LEVIG' and 'MOKIN' is written as 'NLPRM'. How will 'ILICO' be written in that language?

Ans ✓ 1. RORXL

✗ 2. RORWL

✗ 3. RORXK

✗ 4. RORXM

Question ID : 26433048299

Status : Answered

Chosen Option : 1

Q.15 Read the given statements and conclusions carefully. Assuming that the information given in the statements is true, even if it appears to be at variance with commonly known facts, decide which of the given conclusions logically follow(s) from the statements.

Statements:
No forests are trees.
Some trees are short.

Conclusions:
I. Some forests are short.
II. No tree is a forest.

- Ans ☒ 1. Neither conclusion I nor II follow.
☒ 2. Only conclusion II follows.
☒ 3. Both conclusions I and II follow.
☒ 4. Only conclusion I follows.

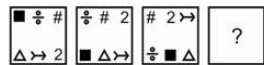
Question ID : 26433047929
Status : Answered
Chosen Option : 2

Q.16 In a certain code language, 'Red are sweet brown' is coded as '8 6 4 2', and 'Blue moon are white' is coded as '5 3 1 2'. What is the code for 'are' in that language?

- Ans ☒ 1. 2
☒ 2. 6
☒ 3. 1
☒ 4. 4

Question ID : 26433048545
Status : Answered
Chosen Option : 1

Q.17 Select the figure from among the given options that can replace the question mark (?) in the following series.



- Ans ☒ 1.
- ☒ 2.
- ☒ 3.
- ☒ 4.

Question ID : 26433048783
Status : Answered
Chosen Option : 2

Q.18 Six boys A1, A2, A3, A4, A5 and A6 are sitting around a circular table, facing towards the centre. A4 is the third to the left of A1. A5 and A3 are neighbours of A4. A6 is to the immediate right of A5. Who is sitting third from the left of A6?

- Ans
- ☒ 1. A2
 - ☒ 2. A3
 - ☒ 3. A5
 - ☒ 4. A4

Question ID : 26433048605
Status : Answered
Chosen Option : 2

Q.19 Identify the number that does NOT belong to the following series.

20, 10, 10, 15, 30, 90

- Ans
- ☒ 1. 15
 - ☒ 2. 10
 - ☒ 3. 30
 - ☒ 4. 90

Question ID : 26433048669
Status : Not Attempted and Marked For Review
Chosen Option : --

Q.20 Seven teachers M, N, O, P, Q, R and S take different number of tuitions. P takes more tuitions than S. M takes more tuitions than Q. R takes the second highest number of tuitions. The number of tuitions that O takes is less than only that of four teachers. N takes less tuitions than P but more than M. Q takes the least number of tuitions. S takes the second lowest number of tuitions. In terms of the number of tuitions taken, who is between N and S?

- Ans
- ☒ 1. R, Q
 - ☒ 2. P, M
 - ☒ 3. O, P
 - ☒ 4. M, O

Question ID : 26433048682
Status : Answered
Chosen Option : 4

Q.21 After interchanging the given two signs and two numbers, what will be the value of the following expression?
4 and 12; ÷ and +
 $12 \times 4 + 3 \div 6 - 2$

- Ans
- ☒ 1. 30
 - ☒ 2. 20
 - ☒ 3. 15
 - ☒ 4. 25

Question ID : 26433048664
Status : Answered
Chosen Option : 2

Q.22 Select the letter from among the given options that can replace the question mark (?) in the following series.

D, G, J, M, P, ?



- Ans  1. R
 2. S
 3. T
 4. U

Question ID : 26433047968
Status : Answered
Chosen Option : 2

Q.23 Select the set in which the numbers are related in the same way as are the numbers of the following sets.

(NOTE : Operations should be performed on the whole numbers, without breaking down the numbers into its constituent digits. E.g 13 – Operations on 13 such as adding /deleting /multiplying etc. to 13 can be performed. Breaking down 13 into 1 and 3 and then performing mathematical operations on 1 and 3 is NOT allowed)

(2, 3, 25)
(3, 4, 49)

- Ans  1. (4, 5, 81)
 2. (4, 5, 91)
 3. (4, 6, 110)
 4. (4, 7, 111)

Question ID : 26433047934
Status : Answered
Chosen Option : 1

Q.24 Select the option that is related to the fifth term in the same way as the second term is related to the first term and the fourth term is related to the third term.

B 2 : F 6 :: K 11 : O 15 :: R 18 : ?

- Ans  1. U 20
 2. V 21
 3. W 21
 4. V 22

Question ID : 26433047919
Status : Answered
Chosen Option : 4





Q.25 Read the given statements and conclusions carefully. Assuming that the information given in the statements is true, even if it appears to be at variance with commonly known facts, decide which of the given conclusions logically follow(s) from the statements.

Statements:

- I. Some M are P.
- II. All X are M.

Conclusions:

- I. Some P are X.
- II. Some P are M.
- III. No P is X.

- Ans  1. Only conclusion II follows
-  2. Only conclusions I and III follow
-  3. Only conclusion III follows
-  4. None of the conclusions follow




Question ID : 26433048779

Status : Answered

Chosen Option : 1

Section : Numerical Aptitude

Q.1 A boat can travel 42 km in 6 hours while going upstream. If the speed of the stream is 2 km/h, then how much distance will the boat cover in 12 hours while going downstream?



- Ans  1. 156 km
-  2. 120 km
-  3. 132 km
-  4. 144 km

Question ID : 26433049920

Status : Answered

Chosen Option : 3

Q.2 The value of $[12 \times 5 - \{200 - (501 + 247 - 386)\}] \div 2$ is:

- Ans  1. 82
-  2. 111
-  3. 61
-  4. 62

Question ID : 26433050093

Status : Answered

Chosen Option : 2

Q.3 The perimeter of an equilateral triangle is 36 cm. What is the area of this triangle?

- Ans
- ☐ 1. $96\sqrt{3} \text{ cm}^2$
 - ☒ 2. $36\sqrt{3} \text{ cm}^2$
 - ☐ 3. $24\sqrt{3} \text{ cm}^2$
 - ☐ 4. $27\sqrt{3} \text{ cm}^2$

Question ID : 26433049585
Status : Answered
Chosen Option : 2

Q.4 A can do a work in 10 days and B can do the same work in 15 days. If they work on it together for 4 days, then the fraction of the work that is left is:

- Ans
- ☐ 1. $\frac{2}{3}$
 - ☐ 2. $\frac{3}{5}$
 - ☐ 3. $\frac{3}{4}$
 - ☒ 4. $\frac{1}{3}$

Question ID : 26433049260
Status : Answered
Chosen Option : 4

Q.5 The average of 11 observations is 10, that of the first 6 being 9 and that of the last 6 being 11. What is the 6th observation?

- Ans
- ☐ 1. 11
 - ☐ 2. 8
 - ☐ 3. 9
 - ☒ 4. 10

Question ID : 26433049323
Status : Answered
Chosen Option : 4

Q.6 If $0.04 : 0.06 :: 0.06 : A$, then what is the value of A?

- Ans
- ☐ 1. 0.05
 - ☐ 2. 0.08
 - ☐ 3. 0.06
 - ☒ 4. 0.09

Question ID : 26433049930
Status : Answered
Chosen Option : 4

Q.7 If $A = \frac{1}{2} \div \frac{1}{3} \times \frac{1}{4} + \frac{1}{5} \times \frac{1}{6}$ and $B = \frac{1}{6} \div \frac{1}{3} \times \frac{1}{5} + \frac{1}{4} \times \frac{1}{2}$, then what is the value of $(A - B)$?

- Ans
- ☐ 1. $\frac{1}{5}$
 - ☒ 2. $\frac{11}{60}$
 - ☐ 3. $\frac{33}{35}$
 - ☐ 4. $\frac{25}{36}$

Question ID : 26433049939

Status : Answered

Chosen Option : 2

Q.8 How much amount can a person get on a sum of ₹6,600, if it is invested at 6.2% per annum for a period of 2 years 6 months on simple interest?

- Ans
- ☐ 1. ₹7,222
 - ☒ 2. ₹7,623
 - ☐ 3. ₹7,852
 - ☐ 4. ₹7,546

Question ID : 26433049331

Status : Answered

Chosen Option : 2

Q.9 P starts from A at 6 a.m. and reaches B after 8 hours. Q starts from B at 8 a.m. and reaches A after 9 hours. When they meet, what is the ratio of the distance travelled by Q to the distance travelled by P?

- Ans
- ☐ 1. 3 : 8
 - ☐ 2. 6 : 7
 - ☒ 3. 6 : 11
 - ☐ 4. 8 : 3


Question ID : 26433049996


Status : Answered


Chosen Option : 3

Q.10 On an 18% discount sale, an article costs ₹6,560. What is the marked price of the article?

Ans  1. ₹8,800

 2. ₹7,000

 3. ₹8,000

 4. ₹7,500


Question ID : 26433049328


Status : Answered


Chosen Option : 3

Q.11 The diagonal of a rectangle is 12 cm long, and it is twice as long as one of the sides of the rectangle. What is the area of this rectangle?

Ans  1. $25\sqrt{3} \text{ cm}^2$

 2. $30\sqrt{3} \text{ cm}^2$

 3. $36\sqrt{3} \text{ cm}^2$

 4. $42\sqrt{3} \text{ cm}^2$


Question ID : 26433050115


Status : Answered


Chosen Option : 3

Q.12 4 boys or 7 girls can complete a piece of work in 18 days. How many days will 12 boys and 21 girls together take to complete this job?

Ans  1. 3 days

 2. 4 days

 3. 6 days

 4. 5 days

Question ID : 26433050286

Status : Answered

Chosen Option : 1

Q.13 The number of boys in a class is 45% of the total number of students in the class. If the number of girls in the class is 33, then what is the number of boys in the class?

Ans  1. 27

 2. 21

 3. 30

 4. 24

Question ID : 26433049900

Status : Answered

Chosen Option : 1

Q.14 A solid sphere whose radius is 21 cm is melted and recast into a regular pyramid of square base. If height of the pyramid is 66 cm, then what is the length of each side of the base of the pyramid? [Use $\pi = \frac{22}{7}$]

- Ans**
- ☒ 1. 68 cm
 - ☒ 2. 85 cm
 - ☒ 3. 42 cm
 - ☒ 4. 48 cm

Question ID : **26433050242**
Status : **Answered**
Chosen Option : **3**

Q.15 120 apples, 240 oranges and 150 pears are packed in cartons in such a way that each carton has the same number of fruits, each carton contains only one type of fruit, and no fruit is left unpacked. What is the smallest possible number of cartons needed for the purpose?

- Ans**
- ☒ 1. 50
 - ☒ 2. 40
 - ☒ 3. 17
 - ☒ 4. 30

Question ID : **26433049270**
Status : **Answered**
Chosen Option : **3**

Q.16 Two mixers and one TV cost ₹500, while two TVs and one mixer cost ₹700. The cost of one TV is:

- Ans**
- ☒ 1. ₹100
 - ☒ 2. ₹400
 - ☒ 3. ₹300
 - ☒ 4. ₹200

Question ID : **26433049276**
Status : **Answered**
Chosen Option : **3**

Q.17 The following table shows the numbers of pairs of shoes of 6 different brands sold by a shop during a given week.

Brand	Shoes
B1	42
B2	58
B3	61
B4	49
B5	71
B6	49

The shop also sells brand B7 now. The number of pairs of shoes sold of B7 are 20% more than the average number of shoes sold of the other 6 brands. What is the number of shoes sold of B7?

- Ans
- ✗ 1. 68
 - ✗ 2. 76
 - ✗ 3. 72
 - ✓ 4. 66

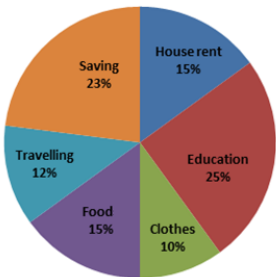
Question ID : 26433050015
Status : Answered
Chosen Option : 4

Q.18 The average of seven numbers is 20. If 2 is subtracted from each number, then what will the new average be?

- Ans
- ✗ 1. 22
 - ✗ 2. 10
 - ✗ 3. 9
 - ✓ 4. 18

Question ID : 26433049577
Status : Answered
Chosen Option : 4

Q.19 The following pie chart shows the expenditure of Ayush on various heads, including Savings, as percentages of his income.

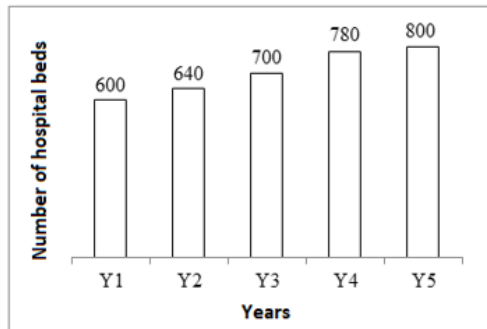


If the expenditure of Ayush on Food is ₹18,000, then what would his savings be?

- Ans
- ✗ 1. ₹31,200
 - ✗ 2. ₹26,400
 - ✓ 3. ₹27,600
 - ✗ 4. ₹33,000

Question ID : 26433050114
Status : Answered
Chosen Option : 3

Q.20 The following bar chart shows the number of hospital beds in a state in 5 consecutive years.



The number of hospital beds in Y6 will be 20% more than the number of such beds in Y5, and the number of hospital beds in Y7 will be 25% more than the number of such beds in Y6. What is the ratio of the number of hospital beds in Y2 to the number of hospital beds in Y7?

- Ans**
- ☒ 1. 16 : 31
 - ☒ 2. 8 : 15
 - ☒ 3. 2 : 7
 - ☒ 4. 4 : 7

Question ID : 26433049941
Status : Answered
Chosen Option : 2

Q.21 A : B = 12 : 17 and A is 20% more than C. If B is 15% less than D, then C is what percentage of D?

- Ans**
- ☒ 1. 47.5%
 - ☒ 2. 50%
 - ☒ 3. 52.5%
 - ☒ 4. 55%

Question ID : 26433049601
Status : Answered
Chosen Option : 2

Q.22 The average weight of all the 200 employees in an office is 68.2 kg, where $\frac{2}{5}$ of the employees are ladies and the ratio of the average weight of a man to that of a woman is 7 : 5. Find the average weight of the female employees.

- Ans**
- ☒ 1. 60 kg
 - ☒ 2. 54 kg
 - ☒ 3. 55 kg
 - ☒ 4. 59 kg

Question ID : 26433050223
Status : Answered
Chosen Option : 3

Q.23 The population of a town is increasing at the rate of 10% per year. If the present population of the town is 1,00,000, what will its population be 2 years from now?

- Ans
- ☒ 1. 3,00,000
 - ☒ 2. 1,21,000
 - ☒ 3. 2,10,000
 - ☒ 4. 1,20,000

Question ID : 26433049282
Status : Answered
Chosen Option : 2

Q.24 Raju sells an object at 20% below its cost price. If he sold it for ₹450 more, he would have made a profit of 25%. What is the original selling price of the object?

- Ans
- ☒ 1. ₹700
 - ☒ 2. ₹500
 - ☒ 3. ₹900
 - ☒ 4. ₹800

Question ID : 26433050102
Status : Answered
Chosen Option : 4

Q.25 The ratio of the numbers of boys and girls in a school is 5 : 8. If there are 260 students in the school, then what is the difference between the numbers of girls and boys in the school?

- Ans
- ☒ 1. 50
 - ☒ 2. 80
 - ☒ 3. 40
 - ☒ 4. 60

Question ID : 26433050006
Status : Answered
Chosen Option : 4

Section : General Awareness

Q.1 In which state of India is Sekrenyi Festival celebrated?

- Ans
- ☒ 1. Nagaland
 - ☒ 2. Rajasthan
 - ☒ 3. Tamil Nadu
 - ☒ 4. Bihar

Question ID : 26433047396
Status : Not Answered
Chosen Option : --

Q.2 _____ is an Indian sport in which a 'raider' enters the opposite team's half to tag opponents, without taking a breath.

- Ans
- ☒ 1. Kho-Kho
 - ☒ 2. Kabaddi
 - ☒ 3. Mallakhamb
 - ☒ 4. Throwball

Question ID : 26433047016
Status : Answered
Chosen Option : 2

Q.3 Who among the following is popularly known as 'Panchamda'?

- Ans
- ☒ 1. Zakir Hussain
 - ☒ 2. Jagjit Singh
 - ☒ 3. AR Rahman
 - ☒ 4. RD Burman

Question ID : 26433046736
Status : Not Answered
Chosen Option : --

Q.4 With respect to the seasons in India, the term 'Kaal Baisakhi' is related to which of the following states in India?

- Ans
- ☒ 1. West Bengal
 - ☒ 2. Karnataka
 - ☒ 3. Punjab
 - ☒ 4. Kerala

Question ID : 26433047503
Status : Not Answered
Chosen Option : --

Q.5 Which of the following is the earliest form of Veda?

- Ans
- ☒ 1. Atharva Veda
 - ☒ 2. Sama Veda
 - ☒ 3. Yajur Veda
 - ☒ 4. Rig Veda

Question ID : 26433046731
Status : Answered
Chosen Option : 4

Q.6 Who among the following has been appointed as India's Foreign Secretary effective from 1 May 2022?

- Ans ☒ 1. Vinay Mohan Kwatra
- ☐ 2. Harsh Vardhan Shringla
- ☐ 3. Subrahmanyam Jaishankar
- ☐ 4. Sujata Mehta

Question ID : 26433046719
Status : Answered
Chosen Option : 1

Q.7 As per Census 2011, which of the following states of India has the lowest literacy rate?

- Ans ☐ 1. Kerala
- ☐ 2. Andhra Pradesh
- ☐ 3. Tamil Nadu
- ☒ 4. Bihar

Question ID : 26433046979
Status : Answered
Chosen Option : 4

Q.8 'Mudiyettu' is a traditional folk theatre form of which Indian state?

- Ans ☐ 1. Manipur
- ☒ 2. Kerala
- ☐ 3. Jharkhand
- ☐ 4. Assam

Question ID : 26433047320
Status : Answered
Chosen Option : 2

Q.9 Rohini Bhate, recipient of Kalidas Samman was associated with which classical dance of India?

- Ans ☐ 1. Odissi
- ☐ 2. Manipuri
- ☐ 3. Sattriya
- ☒ 4. Kathak

Question ID : 26433047512
Status : Not Answered
Chosen Option : --

Q.10 As announced in the Union Budget of Financial Year 2022, income from virtual digital assets will be taxed at _____.

- Ans
- ☒ 1. 2%
 - ☒ 2. 25%
 - ☒ 3. 35%
 - ☒ 4. 3%

Question ID : 26433046742
Status : Answered
Chosen Option : 2

Q.11 Vinod talks about the only planet with liquid water on the surface. Which of the following planets is he talking about?

- Ans
- ☒ 1. Earth
 - ☒ 2. Venus
 - ☒ 3. Mars
 - ☒ 4. Saturn

Question ID : 26433046676
Status : Answered
Chosen Option : 1

Q.12 Which of the following cell organelles functions both as a passageway for intracellular transport and as a manufacturing surface?

- Ans
- ☒ 1. Golgi Apparatus
 - ☒ 2. Lysosome
 - ☒ 3. Mitochondria
 - ☒ 4. Endoplasmic Reticulum

Question ID : 26433047499
Status : Not Answered
Chosen Option : --

Q.13 Which of the following is a famous example of a temple built in complete Dravidian style?

- Ans
- ☒ 1. Konark Sun temple, Konark
 - ☒ 2. Kandariya Mahadeo temple at Khajuraho
 - ☒ 3. Kamakhya temple at Guwahati
 - ☒ 4. Kailasa temple at Ellora

Question ID : 26433046672
Status : Not Answered
Chosen Option : --

Q.14 Who among the following began the Suddhi Movement, which enabled the Hindus who had accepted Islam or Christianity to return to Hinduism, their original faith?

- Ans
- ☒ 1. Ramakrishna Paramhansa
 - ☒ 2. Keshab Chandra Sen
 - ☒ 3. Narendra Nath Dutta
 - ☒ 4. Dayanand Saraswati

Question ID : 26433047508
Status : Not Answered
Chosen Option : --

Q.15 Which of the following is NOT a part of the Preamble of India?

- Ans
- ☒ 1. Liberty
 - ☒ 2. Equality
 - ☒ 3. Aristocracy
 - ☒ 4. Justice

Question ID : 26433046688
Status : Answered
Chosen Option : 3

Q.16 Who among the following was the first Muslim woman ruler of medieval India from 1236 to 1240 AD?

- Ans
- ☒ 1. Razia Sultana
 - ☒ 2. Sultana Chand Bibi
 - ☒ 3. Rani Mangammal
 - ☒ 4. Begum Samru

Question ID : 26433046682
Status : Answered
Chosen Option : 1

Q.17 New Zealand defeated India in the finals of the inaugural World Test Championship in June 2021. Which country hosted this match?

- Ans
- ☒ 1. South Africa
 - ☒ 2. England
 - ☒ 3. Australia
 - ☒ 4. New Zealand

Question ID : 26433047315
Status : Answered
Chosen Option : 2

Q.18 What was the former name of the Yamuna Expressway Project constructed in Uttar Pradesh, India?

- Ans
- ☒ 1. Purvanchal Expressway
 - ☒ 2. Taj Expressway
 - ☒ 3. Noida-Agra Expressway
 - ☒ 4. Kennedy Expressway

Question ID : 26433046677
Status : Not Answered
Chosen Option : --

Q.19 'Straight from the Heart' is the autobiography of which of the following famous personalities?

- Ans
- ☒ 1. Sachin Tendulkar
 - ☒ 2. Rahul Dravid
 - ☒ 3. Kapil Dev
 - ☒ 4. Sunil Gavaskar

Question ID : 26433046735
Status : Not Answered
Chosen Option : --

Q.20 Which of the following is the correct chemical formula of sodium aluminate?

- Ans
- ☒ 1. NaAlO_2
 - ☒ 2. Na_3AlO
 - ☒ 3. NaAlO_3
 - ☒ 4. Na_2AlO_3

Question ID : 26433047398
Status : Answered
Chosen Option : 4

Q.21 How many laws were repealed under the Farm Laws Repeal Bill, 2021?

- Ans
- ☒ 1. Two
 - ☒ 2. Three
 - ☒ 3. Four
 - ☒ 4. One

Question ID : 26433046668
Status : Answered
Chosen Option : 3

Q.22 The movement of people across regions and territories is called _____.

- Ans ☒ 1. Depopulation
- ☒ 2. migration
- ☒ 3. mortality
- ☒ 4. demographic transition

Question ID : 26433047630
Status : Answered
Chosen Option : 2

Q.23 Which of the following statements is correct?

- I. Robert Clive had come to Madras from England in 1743 at the age of 18.
II. After the battle of Buxar, the East India Company appointed Residents in Indian states.

- Ans ☒ 1. Only I
- ☒ 2. Neither I nor II
- ☒ 3. Only II
- ☒ 4. Both I and II

Question ID : 26433047334
Status : Not Answered
Chosen Option : --

Q.24 Which of the following statements is correct regarding 'Arthropoda'?

- I. These animals are bilaterally symmetrical.
II. They have jointed legs.

- Ans ☒ 1. Both I and II
- ☒ 2. Neither I nor II
- ☒ 3. Only II
- ☒ 4. Only I

Question ID : 26433047325
Status : Not Answered
Chosen Option : --

Q.25 Article 280 of the Constitution of India talks about which constitutional body?

- Ans ☒ 1. Goods and Service Tax Council
- ☒ 2. Election commission of India
- ☒ 3. Attorney General of India
- ☒ 4. Finance commission

Question ID : 26433047514
Status : Not Answered
Chosen Option : --