

 Join Whatsapp

www.freejobalert.com
Free Job Alert
.com

 Download App

SSC CGL Tier 1 Previous Years 2022

FreeJobAlert.com



Join Whatsapp

www.freejobalert.com
Free Job Alert
.com



Download App

1. After interchanging the given two numbers and two signs what will be the values of equation (I) and (II) respectively?

× and +, 3 and 9

I. $7 \times 9 - 8 \div 2 + 3$

II. $4 \times 9 - 3 + 8 \div 2$

(a) 0, 1

(b) -26, -29

(c) 6, 0

(d) 12, 13

Answer: (b)

2. In a certain code language, 'BEHOLD' is written as 'BDEHLO' and 'INDEED' is written as 'DDEEIN'. How will 'COURSE' be written in that language?

(a) CEROSU

(b) CEORUS

(c) CEOSUR

(d) CEORSU

Answer: (d)

3. Select the option that is related to the third word in the same way as the second word is related to the first word. (The words must be considered as meaningful English words and must not be related to each other based on the number of letters/number of consonants/vowels in the word.)

Library : Books :: Museum : ?

(a) Building

(b) Artefacts

(c) People

(d) Gallery

Answer: (b)

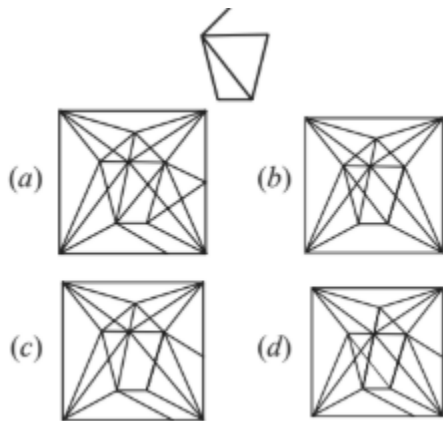
4. Which of the following numbers will replace the question mark (?) in the given series?

382, 322, 272, 232, 202, ?

- (a) 168
- (b) 150
- (c) 182
- (d) 132

Answer: (c)

5. Select the option in which the given figure is embedded (rotation is NOT allowed).



Answer: (b)

6. Select the correct combination of mathematical signs to replace the * signs and balance the given equation.

$$21 * 4 * 156 * 13 * 11 = 83$$

- (a) -, ÷, ×, +
- (b) ×, +, ÷, -
- (c) ×, -, ÷, +
- (d) +, ÷, -, ×

Answer: (c)

7. Which of the following letter-clusters will replace the question mark (?) in the given series?

PK, GT, XC, OL, ?

- (a) GT
- (b) HS
- (c) EV



Join Whatsapp

www.freejobalert.com
Free Job Alert
.com



Download App

(d) FU

Answer: (d)

8. Select the set in which the numbers are related in the same way as are the numbers of the following set. (NOTE: Operations should be performed on the whole numbers, without breaking down the numbers into its constituent digits.)

(3, 14, 1)

(4, 36, 2)

(a) (8, 12, 2)

(b) (5, 81, 4)

(c) (7, 40, 3)

(d) (8, 260, 2)

Answer: (d)

9. Select the correct combination of mathematical signs to sequentially replace the * signs and to balance the given equation.

$$12 * 24 * 4 * 2 * 60$$

(a) +, ×, ÷, =

(b) -, ×, +, =

(c) +, ×, -, =

(d) +, ÷, ×, =

Answer: (a)

10. Three of the following four letter-clusters are alike in a certain way and one is different. Pick the odd one out.

(a) HGF

(b) RQP

(c) UVW

(d) LKJ

Answer: (c)

11. Select the option that is related to the third word in the same way as the second word is related to the first word. (The words must be considered as meaningful English words and must not be related to each other based on the number of letters/number of consonants/vowels in the word)

Phone : Talk :: Television : ?

(a) Remote

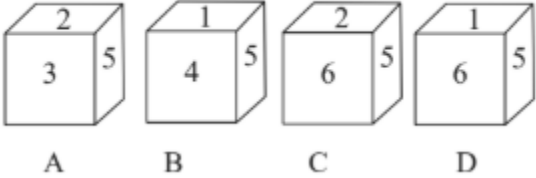
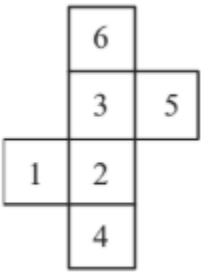
(b) View

(c) Read

(d) Channel

Answer: (b)

12. Select the cube that can be formed by folding the given sheet along the lines.

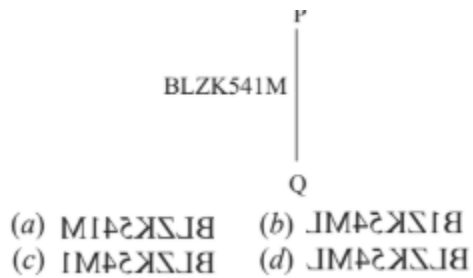


- (a) None are possible
- (b) Only A and B
- (c) Only C and D
- (d) Only A

Answer: (d)

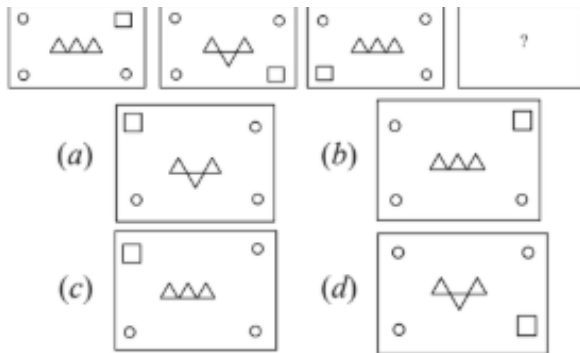
13. Select the correct mirror of the given combination when the mirror is placed at 'PQ' as shown below.

BLZK541M



Answer: (a)

14. Select the figure that will replace the question mark (?) in the following figure.



Answer: (a)

15. Read the given statements and conclusions carefully. Assuming that the information given in the statements is true, even if it appears to be at variance with commonly known facts, decide which of the given conclusions logically follow(s) from the statements.

Statements:

All cards are boxes.

All boxes are torches.

All torches are shoes.

Conclusions:

I. All shoes are torches.

II. All torches are boxes.

III. All boxes are cards.

IV. All cards are shoes

(a) Only conclusion IV follows

(b) Only conclusions II and III follow

(c) Only conclusions I and II follow



Join Whatsapp

www.freejobalert.com
Free Job Alert
.com



Download App

(d) Only conclusion III follows

Answer: (a)

16. In a certain code language, FRUCTUS is coded as 108, and SPRINTER is coded as 119. How will MASCULINE be coded in that language?

(a) 96

(b) 99

(c) 97

(d) 98

Answer: (c)

17. In the following question below are given some statements followed by some conclusions based on those statements. Taking the given statements to be true even if they seem to be at variance from commonly known facts. Read all the conclusions and then decide which of the given conclusion logically follows the given statements.

Statements:

I. All W are S.

II. No D is W.

Conclusions:

I. Some S are W.

II. All S are D.

III. No W is D

(a) Only conclusion III follows

(b) Both conclusions I and III follows

(c) Both conclusions I and II follows

(d) All conclusion follows

Answer: (b)

18. A series is given with one term missing. Select the correct alternative from the given ones that will complete the series.

NMRQ, NDZG, NUHW, NLPM, ?

(a) NQRC

(b) NCXC

(c) NHMH

(d) MQRQ

Answer: (b)

19. Which figure should replace the question mark (?) if the series were to be continued?

4 B V	V T O	T O 6	6 2 V	?
1	6	4	9	
2 T O	4 B 2	B 2 V	T O B	

- (a)

2 V 9
T
O B 6

 (b)

B 6 2
V
9 T O
- (c)

V O B
2
6 9 T

 (d)

T 9 6
O
B 2 V

Answer: (a)

20. Select the option that is related to the fifth number in the same way as the second number is related to the first number and the fourth number is related to the third number.

19 : 324 :: 25 : 576 :: 9 : ?

- (a) 16
- (b) 64
- (c) 88
- (d) 72

Answer: (b)

21. After arranging the given words according to dictionary order, which word will come at 'Fifth' position?

- 1. Popular
 - 2. Population
 - 3. Populace
 - 4. Pope
 - 5. Poppy
- (a) Population
 (b) Poppy
 (c) Popular
 (d) Populace

Answer: (a)



Join Whatsapp

www.freejobalert.com
Free Job Alert
.com



Download App

22. Select the set in which the numbers are related in the same way as are the numbers of the following sets.

(NOTE: Operations should be performed on the whole numbers, without breaking down the numbers into its constituent digits. E.g. 13 – Operations on 13 such as adding /subtracting /multiplying etc. to 13 can be performed. Breaking down 13 into 1 and 3 and then performing mathematical operations on 1 and 3 is not allowed)

(20, 6, 4)

(24, 7, 5)

(a) (65, 9, 4)

(b) (22, 5, 2)

(c) (40, 8, 5)

(d) (42, 7, 3)

Answer: (a)

23. A # B means 'A is the sister of B'

A @ B means 'A is the daughter of B'

A & B means 'A is the husband of B'

A % B means 'A is the father of B'

If A % B & C # D @ E, then how is B related to E?*

(a) Brother

(b) Son-in-law

(c) Father

(d) Son

Answer: (b)



Join Whatsapp

www.freejobalert.com
Free Job Alert
.com



Download App

24. If $A \times B$ means that A is the brother of B, $A - B$ means that A is the sister of B, $A + B$ means that A is the father of B then which of the following expression shows that P is the paternal aunt of R?

- (a) $P - Q \times R$
- (b) $P - Q + R$
- (c) $P \times Q + R$
- (d) $P + Q - R$

Answer: (b)

25. Select the odd group of numbers. (NOTE: Operations should be performed on the whole numbers, without breaking down the numbers into its constituent digits. E.g.13 – Operations on 13 such as adding /subtracting /multiplying etc. to 13 can be performed. Breaking down 13 into 1 and 3 and then performing mathematical operations on 1 and 3 is not allowed)

- (a) (7 – 343 – 331)
- (b) (6 – 216 – 206)
- (c) (5 – 125 – 115)
- (d) (4 – 64 – 54)

Answer: (a)

26. The term 'Back-stick' is used in which of the following games/sports?

- (a) Basketball
- (b) Badminton
- (c) Hockey
- (d) Volleyball

Answer: (c)

27. Which of the following festivals in Punjab is celebrated to commemorate the formation of the Khalsa Panth?

- (a) Lohri
- (b) Hola Mohalla
- (c) Teej
- (d) Baisakhi

Answer: (d)

28. What theme was decided to celebrate the second 'International Day of Yoga' in India?

- (a) Yoga for the achievement of the Sustainable Development Goals



Join Whatsapp

www.freejobalert.com
Free Job Alert
.com



Download App

- (b) Yoga for Peace
- (c) Yoga for Wellness
- (d) Yoga for Heart

Answer: (a)

29. Chemical formula of quick lime is .

- (a) CaO
- (b) CO₂
- (c) CaCO₃
- (d) Ca(OH)₂

Answer: (a)

30. What is the unit of work done?

- (a) Watt
- (b) Decibel
- (c) Ampere
- (d) Joule

Answer: (d)

31. Which of the following sites do “Not” have nuclear power plant?

- (a) Vijayawada
- (b) Naraura
- (c) Tarapur
- (d) Rawat Bhata

Answer: (a)

32. The Ramakrishna Mission stressed the ideal of through social service and selfless action

- (a) bhakti
- (b) education
- (c) salvation
- (d) God

Answer: (c)

33. International Non-Violence Day is observed on:

- (a) 15 August
- (b) 31 October
- (c) 2 October
- (d) 14 November

Answer: (c)

34. Which of the following Dynasties established the kingdom of Vijayanagara?

- (a) Sangama Dynasty
- (b) Nagama Dynasty
- (c) Soma Dynasty
- (d) Tuluva Dynasty

Answer: (a)

35. When was 'Vayudoot' airline setup in India?

- (a) 1981
- (b) 1991
- (c) 1971
- (d) 1969

Answer: (a)

36. Wearing away of landscape by different agents like water, wind and ice is called .

- (a) Weathering
- (b) Erosion
- (c) Metamorphosis
- (d) Sedimentation

Answer: (b)

37. Who has been appointed as the new chairman of the Central Board of Direct Taxes in June 2022?

- (a) Nitin Gupta
- (b) Nidhi Chibber
- (c) Ashish Jha
- (d) M Jagadesh Kumar

Answer: (a)

38. Who among the following is known as 'Sarod Samrat' in Indian Classical Music?

- (a) Pandit Ravishankar Prasad
- (b) Aamir Ali Khan
- (c) Amjad Ali Khan
- (d) Kishan Mahara

Answer: (c)

39. Which of the following is NOT one of the methods of national income estimation?

- (a) Banking method
- (b) Expenditure method
- (c) Product method
- (d) Income method

Answer: (a)

40. The term 'Parliament' refers to the_____.

- (a) Rajya Sabha
- (b) Lok Sabha
- (c) State legislature
- (d) National legislature

Answer: (d)

41. Chief Minister of which state has inaugurated a project of the Women and Child Development department to provide milk and eggs to children at all anganwadis in the state in a bid to improve their nutrition levels?

- (a) Andhra Pradesh
- (b) Kerala
- (c) Karnataka
- (d) Tamil Nadu

Answer: (b)

42. A 'Camel Protection and Development Policy' has been announced by the government of .

- (a) Rajasthan
- (b) Punjab
- (c) Gujarat
- (d) Ladakh

Answer: (a)

43. Who among the following Presidents of India was also the deputy chairman of Planning Commission?

- (a) V V Giri
- (b) K R Narayanan
- (c) Ramaswamy Venkataraman
- (d) Pranab Mukherjee

Answer: (d)



Join Whatsapp

www.freejobalert.com
Free Job Alert
.com



Download App

44. In Golgi apparatus, the maturing face is:

- (a) spherical
- (b) convex
- (c) bi-concave
- (d) concave

Answer: (b)8

45. Raja Ram Mohan Roy founded a reform association known as Brahma Sabha which was later known as .

- (a) Dev Samaj
- (b) Arya Samaj
- (c) Brahma School
- (d) Brahma Samaj

Answer: (d)

46. part of xylem tissue in plants stores food.

- (a) Vessels
- (b) Xylem fibres
- (c) Xylem parenchyma
- (d) Tracheids

Answer: (c)

47. Who among the following composers won the Grammy in 2015 for his album 'Winds of Samsara' – a collaboration with South African flautist Wouter Kellerman?

- (a) Mano Murthy
- (b) Raghu Dixit
- (c) Subhashish Ghosh
- (d) Ricky Kej

Answer: (d)

48. In which of the following Indian states, Harappan cities have NOT been found?

- (a) Uttarakhand
- (b) Gujarat
- (c) Rajasthan
- (d) Haryana

Answer: (a)

49. Burning of coal is an example of .

- (a) decomposition reaction

- (b) double displacement reaction
- (c) combination reaction
- (d) displacement reaction

Answer: (c)

50. The foremost right among rights to freedom is .

- (a) Right to life and personal liberty
- (b) Preventive detention
- (c) Freedom to assemble
- (d) Right to freedom of speech and expression

Answer: (a)

51. A dishonest merchant sells goods at a 12.5% loss on the cost price, but uses 28 g weight instead of 36 g. What is his percentage profit or loss?

- (a) 6.25% loss
- (b) 12.5% gain
- (c) 18.75% gain
- (d) 10.5% loss

Answer: (b)

52. The HCF of two numbers is 12. Which one of the following can never be their LCM?

- (a) 72
- (b) 60
- (c) 90
- (d) 84

Answer: (c)

53. Two circles touch each other externally at P. AB is a direct common tangent to the two circles, A and B are points of contact, and $\angle PAB = 40^\circ$. The measure of $\angle ABP$ is:

- (a) 45°
- (b) 55°
- (c) 50°
- (d) 40°

Answer: (c)

54. The mean proportion of 169 and 144 is:

- (a) 156
- (b) 147



Join Whatsapp

www.freejobalert.com
Free Job Alert
.com



Download App

(c) 126

(d) 165

Answer: (a)

55. The length and breadth of a rectangle are increased by 8% and 5%, respectively. By how much percentage will the area of the rectangle increase?

(a) 13.4%

(b) 15.4%

(c) 12.4%

(d) 16.4%

Answer: (a)

56. Simplify $\cos 45^\circ / (\sec 30^\circ + \operatorname{cosec} 30^\circ)$

(a) $3\sqrt{2}/8 + \sqrt{6}/8$

(b) $\sqrt{3}/(2\sqrt{2} - 2\sqrt{6})$

(c) $3\sqrt{2}/8 - \sqrt{6}/8$

(d) $\sqrt{3}/(2\sqrt{6} - 2\sqrt{2})$

Answer: (c)

57. Which of the following numbers is a divisor of $(49^{15} - 1)$?

(a) 46

(b) 14

(c) 8

(d) 50

Answer: (c)

58. In a 1500 m race, Anil beats Bakul by 150 m and in the same race Bakul beats Charles by 75 m. By what distance does Anil beat Charles?

(a) 217.50 m

(b) 200.15 m

(c) 293.50 m

(d) 313.75 m

Answer: (a)

59. 2,500, when invested for 8 years at a given rate of simple interest per year, amounted to 3,725 on maturity. What was the rate of simple interest that was paid per annum?

(a) 6%

(b) 6.125%

(c) 6.25%



Join Whatsapp

www.freejobalert.com
Free Job Alert
.com



Download App

(d) 5.875%

Answer: (b)

60. The following table shows the number of pages printed by 3 printer during 3 days. What is the average number of pages printed by printer Z during the 3 days?

Monday: 210

Tuesday: 160

Wednesday: 218

(a) 196

(b) 194

(c) 192

(d) 190

Answer: (a)

61. The batting average for 27 innings of a cricket player is 47 runs. His highest score in an innings exceeds his lowest score by 157 runs. If these two innings are excluded, the average score of the remaining 25 innings is 42 runs. Find his highest score in an innings.

(a) 176

(b) 188

(c) 186

(d) 174

Answer: (b)

62. P and Q can complete a project in 15 days and 10 days, respectively. They started doing the work together, but after 2 days, Q had to leave and P alone completed the remaining work. In how many days was the whole work completed?

(a) 11

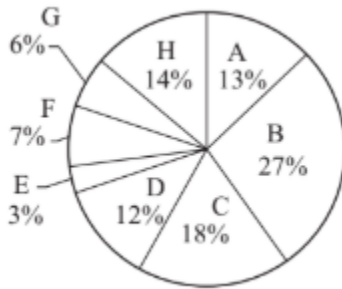
(b) 12

(c) 13

(d) 10

Answer: (b)

63. The pie chart given below shows the number of truck sold by 8 different companies. The total number of truck sold by all these 8 companies are 4000. Number of truck sold by a particular company is shown as a percent of total number of truck sold by all these 8 companies. The number of trucks sold by B, C, F and H is how much percent less than the number of trucks sold by all these 8 companies?



- (a) 46 percent
- (b) 22 percent
- (c) 34 percent
- (d) 14 percent

Answer: (c)

64. If $x^2 - 5x + 1 = 0$, then the value of the given expression is:

- (a) 30
- (b) 25
- (c) 23
- (d) 28

Answer: (c)

65. In a right-angled triangle PQR, right-angled at Q, the length of the side PR is 17 units, length of the base QR is 8 units, and length of the side PQ is 15 units. If $\angle RPQ = \alpha$, then $\sin \alpha + \cos \alpha$ is:

- (a) 18/17
- (b) 23/17
- (c) 21/17
- (d) 15/17

Answer: (b)

66. If the given algebraic relation holds, then what is the value of k?

- (a) 119



Join Whatsapp

www.freejobalert.com
Free Job Alert
.com



Download App

(b) 128

(c) 24

(d) 109

Answer: (a)

67. The circumference of the two circles is 198 cm and 352 cm respectively. What is the difference between their radii?

(a) 45 cm

(b) 16.5 cm

(c) 49.5 cm

(d) 24.5 cm

Answer: (d)

68. Radius of a circle is 10 cm. Angle made by chord AB at the centre of this circle is 60 degree. What is the length of this chord?

(a) 40 cm

(b) 20 cm

(c) 30 cm

(d) 10 cm

Answer: (d)

69. How many spherical lead shots each of diameter 8.4 cm can be obtained from a rectangular solid of lead with dimension 88cm, 63 cm, 42 cm.

(a) 920

(b) 750

(c) 650

(d) 860

Answer: (b)

70. The table given below shows the number of spoon manufactured by five factories. What are the ratio of number of spoon manufactured by P to the number of spoon manufactured by R?

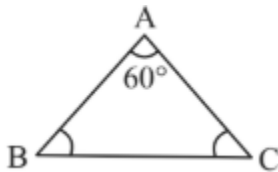
Factory	Spoon
P	100
Q	200
R	150
S	50
T	250

$P = 100, R = 150$

- (a) 3 : 2
- (b) 2 : 3
- (c) 14 : 1
- (d) 1 : 3

Answer: (b)

71. In the triangle ABC, $AB = 12$ cm and $AC = 10$ cm, and $\angle BAC = 60^\circ$. What is the value of the length of the side BC?



- (a) 10 cm
- (b) 7.13 cm
- (c) 13.20 cm
- (d) 11.13 cm

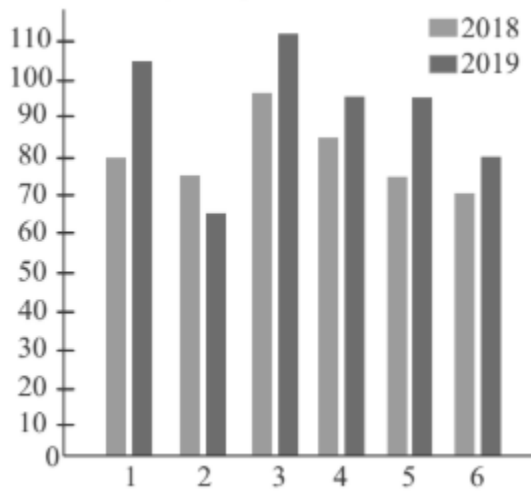
Answer: (d)

72. The value of $\tan^2\theta + \cot^2\theta - \sec^2\theta \operatorname{cosec}^2\theta$ is:

- (a) 2
- (b) -2
- (c) 0
- (d) $1/2$

Answer: (b)

73. The following bar graph shows the sales of books (in thousand) from six branches of a publishing company during two consecutive years 2018 and 2019. What is the ratio of the total sales of the first branch for both years to the total sales of the fourth branch for both years?



- (a) 4 : 3
- (b) 5 : 9
- (c) 8 : 11
- (d) 37 : 36

Answer: (d)

74. If the given algebraic expression holds, then what is the value of p?

- (a) -119
- (b) -129
- (c) 119
- (d) 129

Answer: (c)

75. Riya could not decide between discount of 30% or two successive discounts of 25% and 5%, both given on shopping of ₹3,840. What is the difference between both the discounts?*

- (a) ₹44
- (b) ₹48
- (c) ₹42
- (d) ₹46

Answer: (b)

76. Sentences of a paragraph are given below in jumbled order. Arrange the sentences in the correct order to form a meaningful and coherent paragraph.

- A. When this extra water vapour condenses into precipitation, it results in heavier rain — or, if it's cold enough, heavier snow.
- B. The atmosphere can store an additional 4% of water vapour for every



Join Whatsapp

www.freejobalert.com
Free Job Alert
.com



Download App

additional 1°F of warming.

C. More water evaporates from soils, plants, lakes and seas as the atmosphere warms.

D. One of the most obvious indications of climate change is heavier rainfall.

(a) CBDA

(b) DCBA

(c) ACDB

(d) BCAD

Answer: (b)

77. Select the correct indirect form of the given sentence. She said, "I am in no mood to work now."

(a) She said that she has been in no mood to work then.

(b) She said that she was is no mood to work now.

(c) She said that she was in no mood to work then.

(d) She said that she has been in no mood to work now.

Answer: (c)

78. Select the correct passive form of the given sentence. Manu will tell her later.

(a) She will be tell later by Manu.

(b) She will tell later by Manu.

(c) She will be told later by Manu.

(d) She will be tell later.

Answer: (c)

79. Select the correct active form of the given sentence. Has the villa been occupied by them?

(a) Did they occupied the villa?

(b) Had they occupied the villa?

(c) Have they occupied the villa?

(d) Do they occupied the villa?

Answer: (c)

80. In the given sentence, one word may have been incorrectly spelt.

Select the correctly spelt word from the given alternatives. If there is no error, select 'No error' as your answer.

The erroneous information spread rapidly across the nation and created a stir.

(a) erronous



Join Whatsapp

www.freejobalert.com
Free Job Alert
.com



Download App

- (b) No error
- (c) eronneous
- (d) errauneous

Answer: (b)

81. Select the most appropriate ANTONYM of the word 'SINKS' from the given sentence. Groups work together to create Christmas parade themes, which are then carried out in floats, musical groups, and strolling figures.

- (a) Floats
- (b) Create
- (c) Parade
- (d) Strolling

Answer: (a)

82. Select the most appropriate option to fill in the blank.

The angles are equal, consequently the sides are .

- (a) equal
- (b) unequal
- (c) larger
- (d) smaller

Answer: (a)

83. Select the most appropriate meaning of the given idiom.

Like a cakewalk

- (a) Smooth surface
- (b) Pleasant experience
- (c) Easy task
- (d) Active

Answer: (c)

84. Select the most appropriate option that can substitute the underlined segment in the given sentence. If there is no need to substitute it, select 'No substitution'.

After finishing high school, I plan to pursuing law.

- (a) No substitution
- (b) plan to pursue

- (c) plan in pursue
- (d) plan to pursuing

Answer: (b)

85. Select the most appropriate synonym of the given word.

Confusion

- (a) Intrepidity
- (b) Stagnation
- (c) Perusal
- (d) Commotion

Answer: (d)

86. Select the most appropriate option to substitute the underlined segment in the given sentence.

Our guests arrived; they are sitting in the garden.

- (a) shall arrive
- (b) have arrived
- (c) are arriving
- (d) might arrive

Answer: (b)

87. The following sentence has been split into four segments. Identify the segment that contains a grammatical error.

During an earthquake,/ it is advised to take / cover above a table to save your life.

- (a) cover above a table
- (b) During an earthquake,
- (c) it is advised to take
- (d) to save your life.

Answer: (a)

88. Select the INCORRECTLY spelt word.

- (a) Finery
- (b) Hiest



Join Whatsapp

www.freejobalert.com
Free Job Alert
.com



Download App

- (c) Cringe
- (d) Defer

Answer: (b)

89. Select the most appropriate meaning of the given idiom.

All eyes

- (a) Watching with anger
- (b) Watching eagerly
- (c) Watching with no interest
- (d) Not watching at all

Answer: (b)

90. Select the most appropriate option that can substitute the underlined segment in the given sentence.

He was looking into his book for the last two hours but couldn't find it.

- (a) looking down on his book
- (b) looking above his book
- (c) looking for his book
- (d) looking after his book

Answer: (c)

91. Select the most appropriate collocating word to fill in the blank.

Ram was praised for his leadership.

- (a) imaginary
- (b) visionary
- (c) magical
- (d) broad

Answer: (b)

92. Select the most appropriate word segment for the underlined word in the given sentence.

Pintu has been advised to reduce smoking by his family doctor.

- (a) cut down
- (b) less down
- (c) lower down
- (d) up down

Answer: (a)

93. Select the most appropriate ANTONYM of the given word.

Rebellion

- (a) Uprising



Join Whatsapp

www.freejobalert.com
Free Job Alert
.com



Download App

- (b) Loyalty
- (c) Sedition
- (d) Allotment

Answer: (b)

94. Select the most appropriate ANTONYM of the given word.

Hospitality

- (a) Complaint
- (b) Cordiality
- (c) Coldness
- (d) Wrathful

Answer: (c)

95. Select the sentence with the appropriate use of adverb of manner.

- (a) He done his work regularly.
- (b) He has just done his work.
- (c) He does his work carefully.
- (d) He has done his work on my table.

Answer: (c)

96. Select the most appropriate option to fill in blank number 1.

Digital India can be the prime (1) _ behind making a reality of the government's promise of minimum government, maximum governance.

- (a) impact
- (b) might
- (c) factors
- (d) force

Answer: (d)

97. Select the most appropriate option to fill in blank number 2.

Such a transformation requires technology to be firmly (2) _ into government.

- (a) inserted
- (b) embedded
- (c) planted



Join Whatsapp

www.freejobalert.com
Free Job Alert
.com



Download App

(d) stuck

Answer: (b)

98. Select the most appropriate option to fill in blank number 3.
Embedding technology into government (3) _ will do three things.

(a) offices

(b) details

(c) processes

(d) hierarchies

Answer: (c)

99. Select the most appropriate option to fill in blank number 4.

Transform the lives of citizens especially those at the bottom of the (4) _
pyramid.

(a) mythical

(b) proverbial

(c) hypothetical

(d) classified

Answer: (b)

100. Select the most appropriate option to fill in blank number 5.

A 2014 McKinsey Global Institute report predicts that the large-scale (5)
_ of technology through Digital India positions India with the biggest
opportunity yet to accelerate economic growth.

(a) enhancement

(b) anticipation

(c) adaptation

(d) monitoring